



Sayıları Karşılaştırma ve Sıralama

İki basamaklı doğal sayıları karşılaştırırken önce sayıların onlar basamağına bakılır. Onlar basamağı büyük olan sayı büyüktür.

45 büyüktür 33'ten






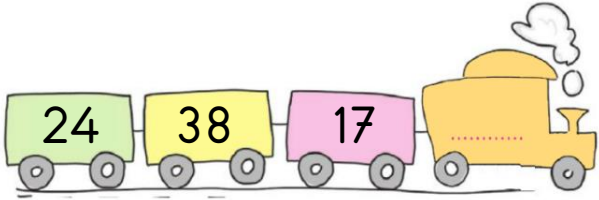
39 küçüktür 44'ten

Onlar basamağı eşit olan sayıların birler basamağına bakılır. Birler basamağı büyük olan sayı büyüktür.

43 büyüktür 41'den


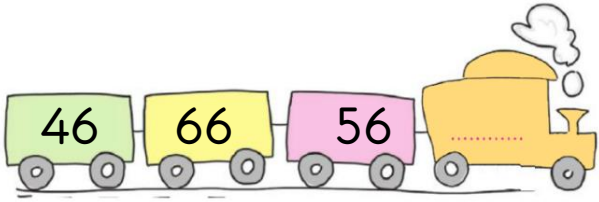




38 küçüktür 39'dan

Aşağıdaki verilen sayılardan en küçüğünü lokomotif'e yazınız.





Aşağıdaki verilen sayılardan en büyüğünü lokomotifte yazınız.



Verilen sayılardan küçük ve büyük birer sayıyı örnekteki gibi kutuların içerisine yazınız.

25	49	53		13			78	
	47			52			79	
	57			85			92	
	31			25			48	
	23			63			55	





Aşağıda verilen sayılardan en küçük olanı mavi kutuya, en büyük olanı sarı kutuya yazınız.

29 42  
18 67

55 27  
39 95

45 73  
67 52

72 95  
86 75

73 61  
37 49














57 84  
92 76

35 27  
85 72

74 52  
57 62




Aşağıdaki noktalı yerlere ">, <, =" sembollerinden uygun olanı yazınız.






Aşağıdaki doğal sayıları sembollere uygun olarak sıralayınız.


39-21-85-65




91-56-73-67




52-78-16-85




42-85-37-92




54-82-37-45




75-41-76-84




82-73-87-91



12-94-76-86



56-73-54-68



39-58-47-63

